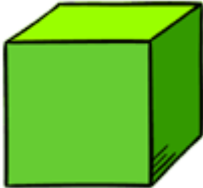
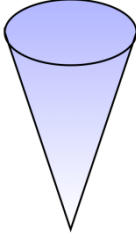
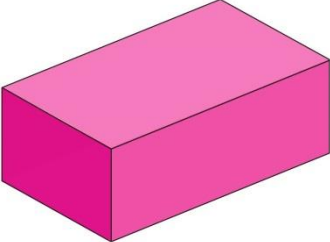


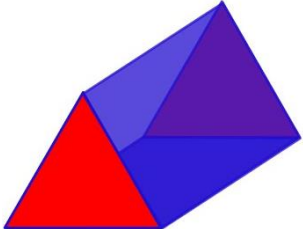


Tuesday Maths

L.O: To identify 2D shapes on 3D faces.

Can you spot the 2D shapes on the 3D shapes?

	<p>Name of 3D shape _____</p> <p>2D shape I can see _____</p>
	<p>Name of 3D shape _____</p> <p>2D shape I can see _____</p>
	<p>Name of 3D shape _____</p> <p>2D shape I can see _____</p>
	<p>Name of 3D shape _____</p> <p>2D shapes I can see _____</p>
	<p>Name of 3D shape _____</p> <p>2D shape I can see _____</p>
	<p>Name of 3D shape _____</p> <p>2D shapes I can see _____</p>