

Date: _____

Name: _____

Independent task:

Speaking frame




The..... is about hands long.

That is shorter than the
because that is roughly hands
long.

- Find 5 or 6 objects to measure with your **hands**.
- Estimate (a good guess) how long the object is in hands.
- Check your estimate by measuring.

[illegible]

Wednesday Challenge:

<u>Objects</u>	<u>hands</u>
	6
	4
	10

- Which is the **longest** object?
- Which is the **shortest** object?
- Explain your answer
